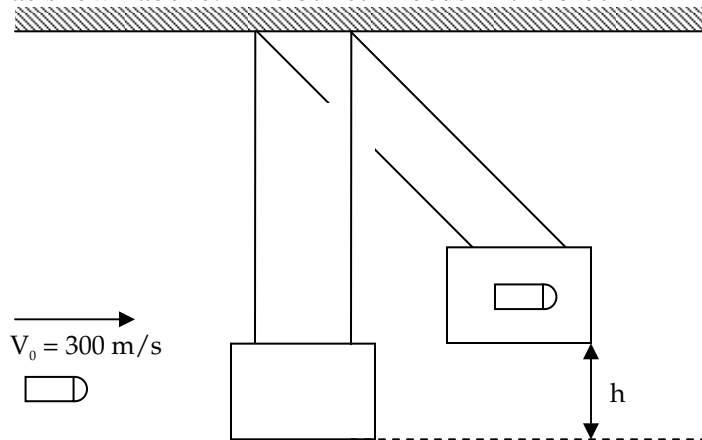
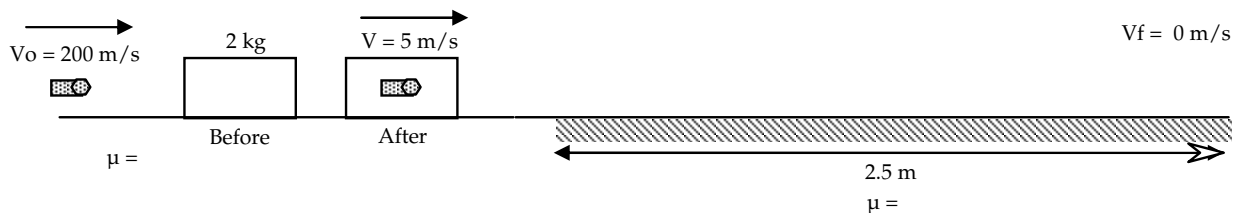


W7.07**MOMENTUM**

- Venus Williams hits a 125 mph (57.9 m/s) serve at Lindsay Davenport. Davenport rockets a 100 mph (46.3 m/s) forehand past Williams for a clean winner. Assuming the ball has mass of 25 g and each impact lasts for 0.05 sec, calculate the average force exerted by
 - Williams' racket during the serve and
 - Davenport's racket during the return of serve.
- A bullet with a mass of 0.050 kg and an initial velocity of 300 m/s is shot horizontally at a 5-kg block suspended as shown above. The bullet imbeds in the block.



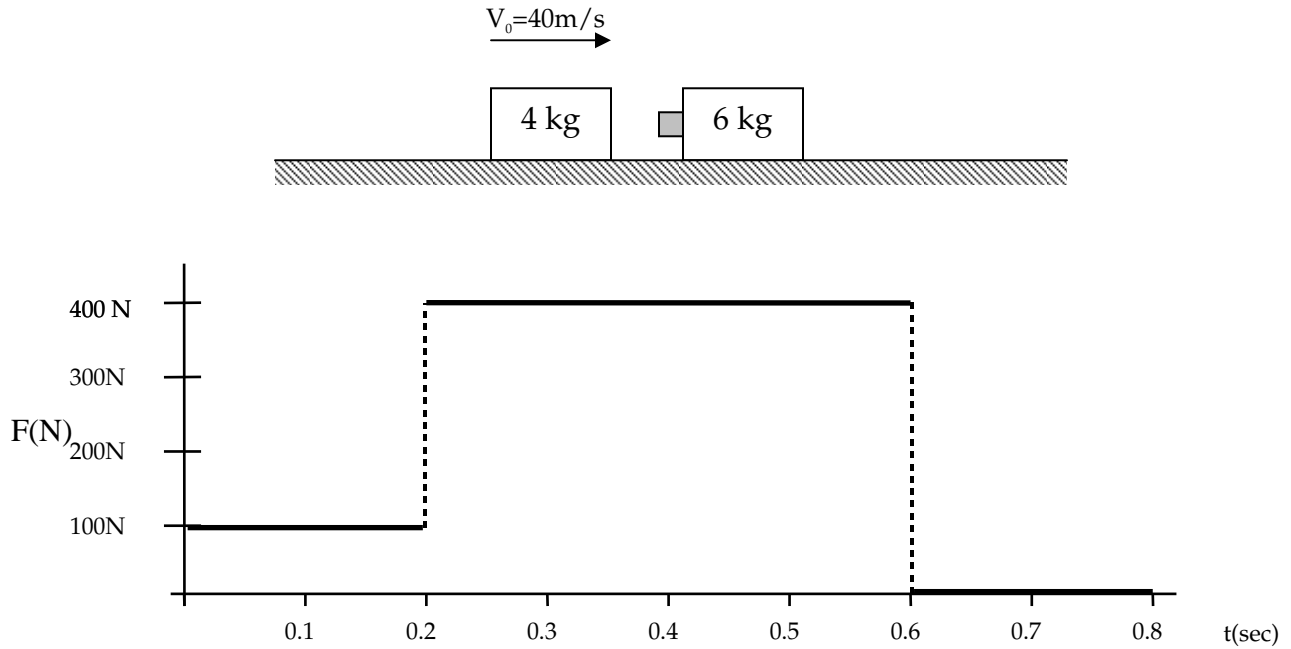
- Calculate the velocity of the bullet-block system just after impact.
 - Calculate the kinetic energy of the bullet-block system just after impact.
 - Calculate the maximum height to which the bullet-block system swings.
- A bullet with a velocity of 200 m/s is shot at a 2-kg block resting on a horizontal frictionless surface. The bullet imbeds in the block and the bullet-block system slides across the surface with a speed of 5 m/s.
 - Determine the mass of the bullet.



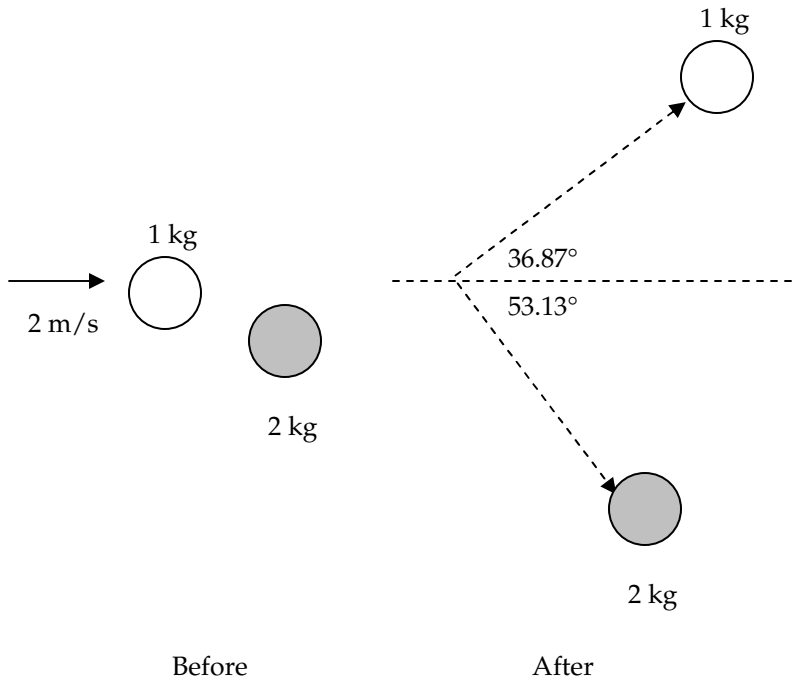
The bullet-block system continues to slide until it encounters a rough ($\mu \neq 0$) horizontal surface. If the bullet-block combination comes to rest after sliding an additional 2.5-m, determine

- the coefficient of friction between the rough surface and the block.
- the time it takes the bullet-block combination to come to rest (after it comes into contact with the rough surface).

4. A 4-kg block slides on a frictionless surface at 40 m/s toward a 6-kg block (with a massless sponge attached) initially at rest. The force that the 4-kg block exerts on the 6-kg block is plotted below.



- What is the total impulse of the 4-kg block on the 6-kg block?
 - Sketch the plot of the force of the 6-kg block on the 4-kg block (vs. time).
 - Find the speed of the 6-kg block after the collision.
 - Find the speed of the 4-kg block after the collision.
 - How much energy is lost or gained during the collision?
5. A 1-kg air hockey puck traveling at 2 m/s collides with a 2-kg puck. The two pucks move off after the collision as indicated in the diagram below. Determine the final velocity of each puck.



KEY-W7.07

1.
 - a. 29 N
 - b. 52.1 N

2.
 - a. 2.97 m/s
 - b. 22.3 J
 - c. 0.44 m

3.
 - a. 0.0513 kg
 - b. $\mu = 0.5$
 - c. $t = 1$ second

4.
 - a. 180 N·s
 - b. Equal and opposite to plot shown (by 3rd Law)
 - c. 30 m/s
 - d. -5 m/s
 - e. -450 J

5. $V_{1\text{ kg}} = 1.6$ m/s; $V_{2\text{ kg}} = 0.6$ m/s